



ΒΡΕΣ ΤΟ ΑΠΟΤΕΛΕΣΜΑ

Υπολογίζω και γράφω το αποτέλεσμα των πράξεων.

$4 \times 4 = \square$

$8 \times 4 = \square$

$8 \times 3 = \square$

$5 \times 5 = \square$

$3 \times 9 = \square$

$9 \times 9 = \square$

$6 \times 7 = \square$

$7 \times 7 = \square$

$5 \times 7 = \square$

$5 \times 6 = \square$

$5 \times 8 = \square$

$3 \times 7 = \square$

$2 \times 3 = \square$

$8 \times 8 = \square$

$7 \times 4 = \square$

$2 \times 2 = \square$

ΠΡΟΒΛΗΜΑΤΑΚΙΑ

✓ Ένα ποδήλατο έχει 2 ρόδες. Πόσες ρόδες έχουν τα 3 ποδήλατα;



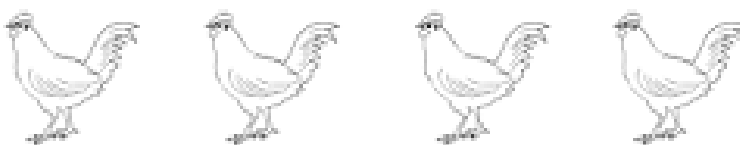
ΛΥΣΗ: $\boxed{2} + \boxed{2} + \boxed{2} = \boxed{}$

ή

$\boxed{3} \times \boxed{2} = \boxed{}$

Απάντηση: _____

✓ Η μία κοτούλα έχει 2 πόδια. Πόσα πόδια έχουν οι 4 κοτούλες;



ΛΥΣΗ: $\boxed{} + \boxed{} + \boxed{} + \boxed{} = \boxed{}$

ή

$\boxed{} \times \boxed{} = \boxed{}$

Απάντηση: _____

✓ Ο κάθε άνθρωπος έχει 2 μάτια. Πόσα μάτια έχουν οι 5 άνθρωποι;


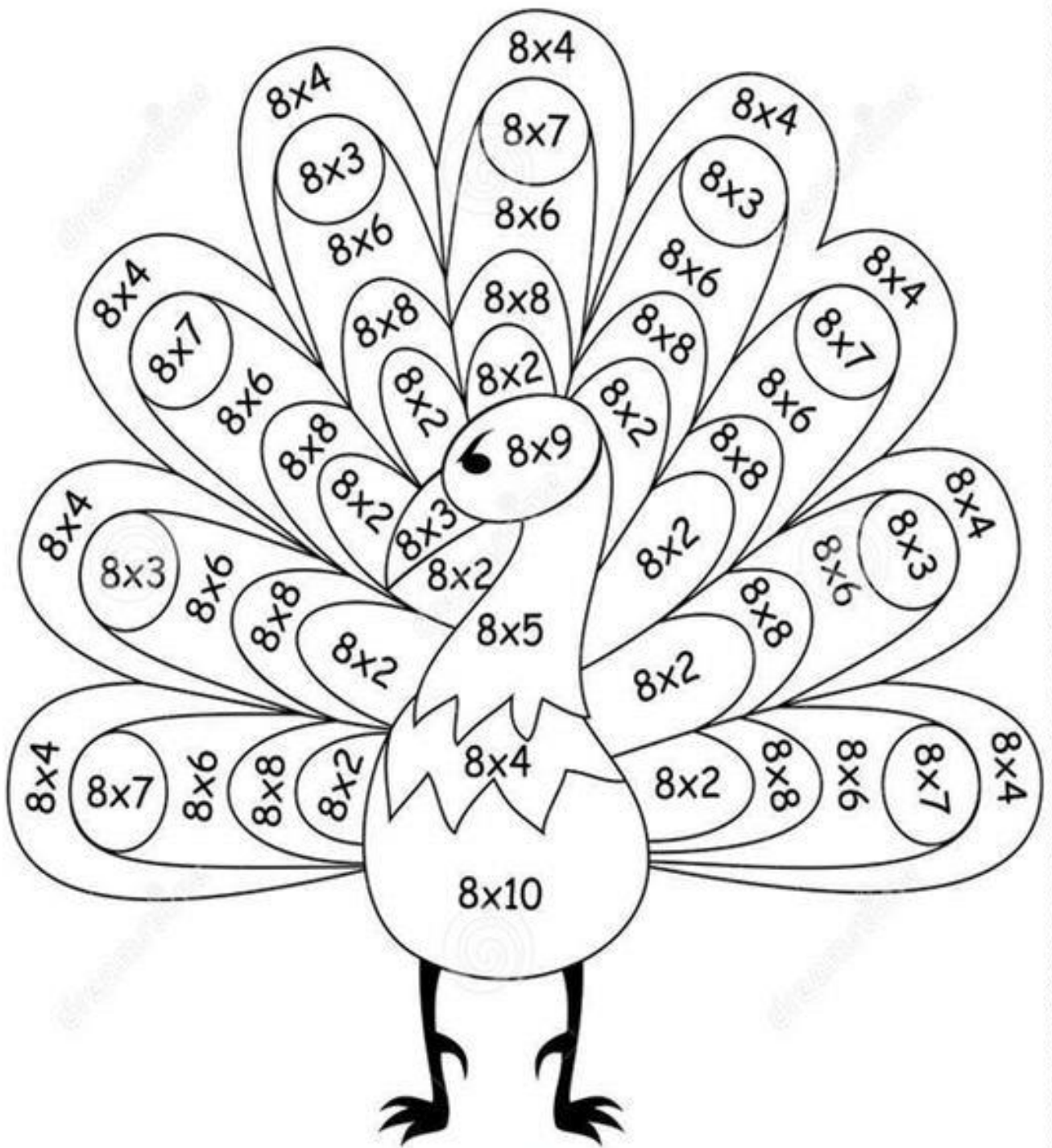


ΛΥΣΗ: $\boxed{} \quad \boxed{} \quad \boxed{} \quad \boxed{} \quad \boxed{} \quad \boxed{}$

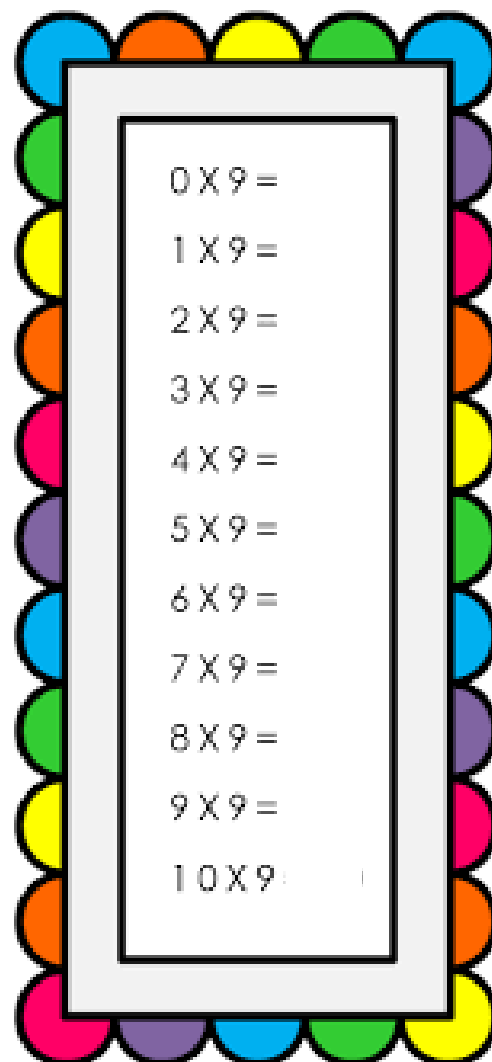
$\boxed{} \quad \boxed{} \quad \boxed{}$

Απάντηση: _____

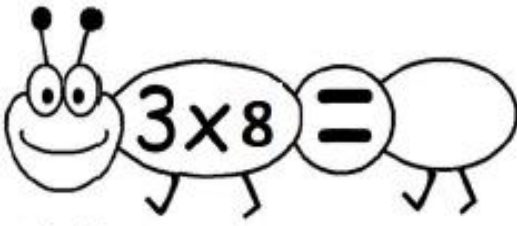
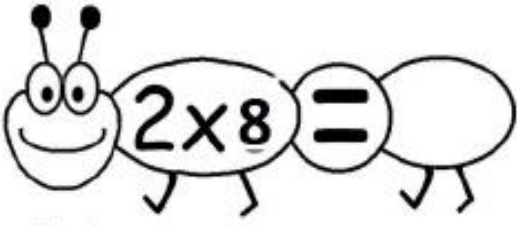
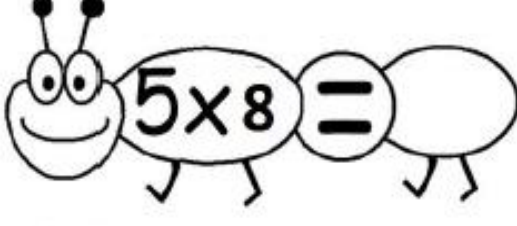
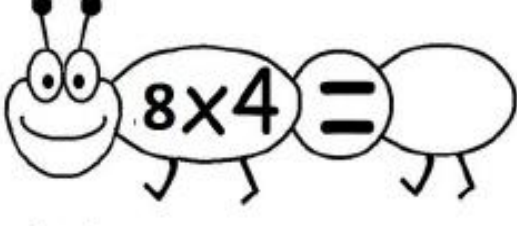
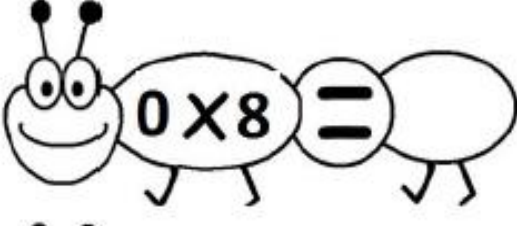



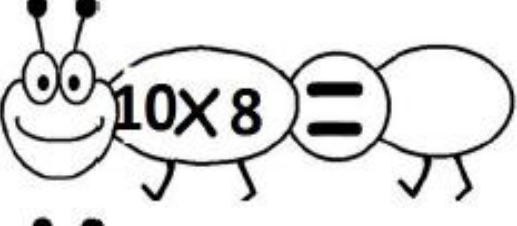


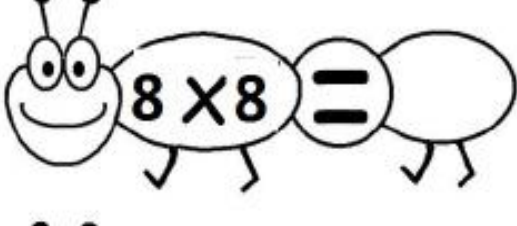

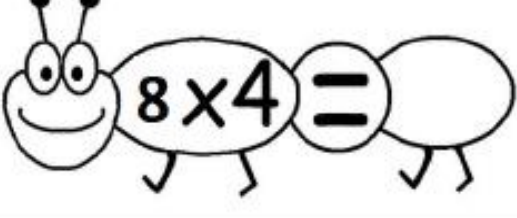
Χρωματίζω το σχέδιο



ΓΡΑΦΩ ΤΟ ΑΠΟΤΕΛΕΣΜΑ



ΓΡΑΦΩ ΤΟ ΑΠΟΤΕΛΕΣΜΑ

 $3 \times 8 = \bigcirc$	 $2 \times 8 = \bigcirc$
 $5 \times 8 = \bigcirc$	 $8 \times 4 = \bigcirc$
 $0 \times 8 = \bigcirc$	 $1 \times 8 = \bigcirc$
 $9 \times 8 = \bigcirc$	 $8 \times 7 = \bigcirc$
 $10 \times 8 = \bigcirc$	 $8 \times 9 = \bigcirc$
 $8 \times 6 = \bigcirc$	 $8 \times 8 = \bigcirc$
 $2 \times 8 = \bigcirc$	 $8 \times 4 = \bigcirc$

Χρωματίζω όπως το παράδειγμα

ηροσιδία του 2 -> 2, 3, 4, 5, 6, 8, 9, 10, 11, 12, 14, 15, 16, 18, 19, 20

ηροσιδία του 3 -> 3, 5, 6, 8, 9, 11, 12, 14, 15, 17, 18, 19, 21, 24, 26, 27, 30

ηροσιδία του 4 -> 4, 7, 8, 11, 12, 16, 19, 20, 21, 24, 28, 31, 32, 34, 36, 40

ηροσιδία του 5 -> 5, 10, 14, 15, 20, 23, 25, 30, 31, 35, 38, 40, 45, 47, 50

ηροσιδία του 6 -> 6, 12, 15, 16, 18, 24, 26, 30, 34, 36, 41, 42, 48, 54, 60

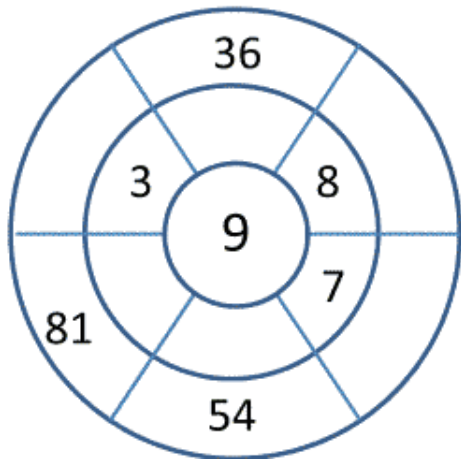
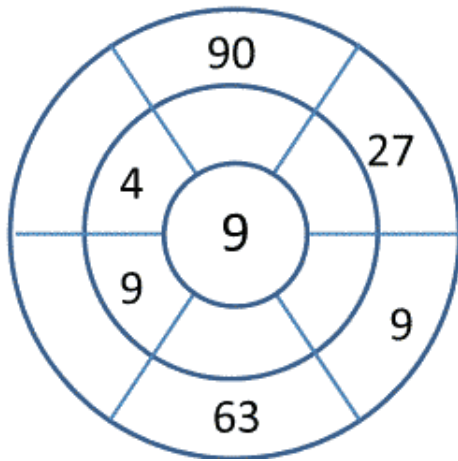
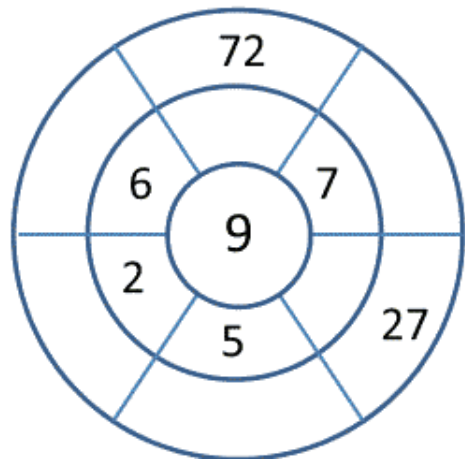
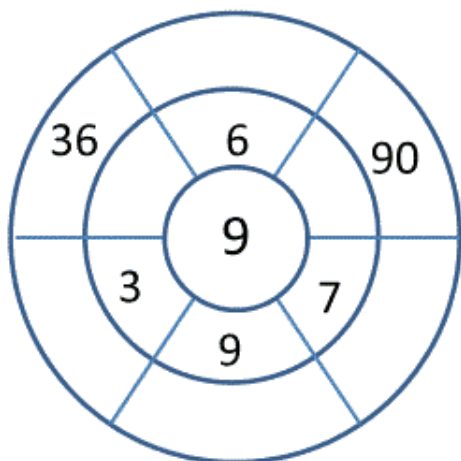
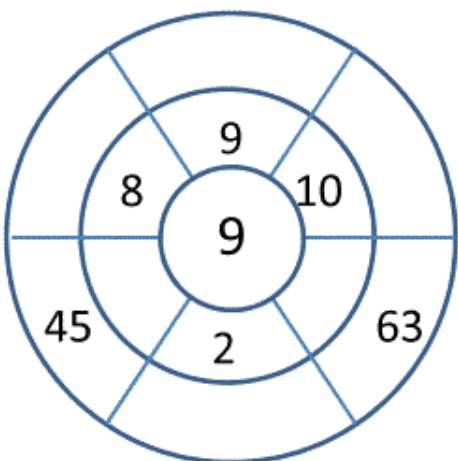
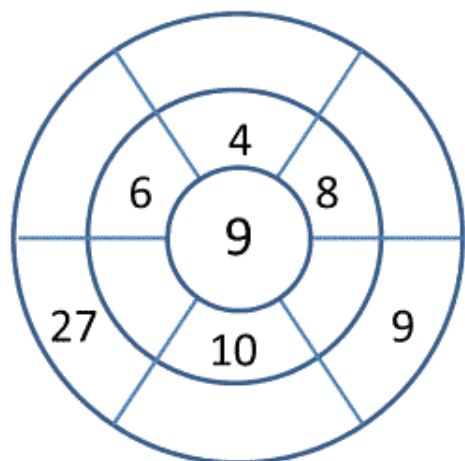
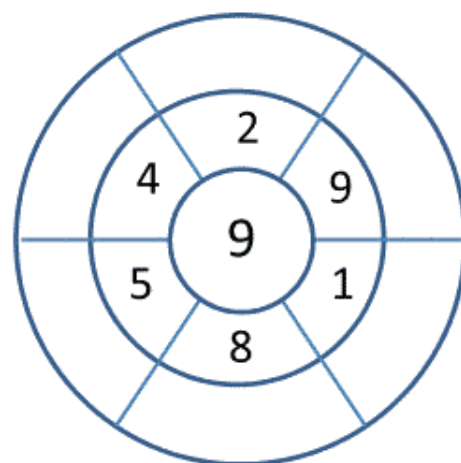
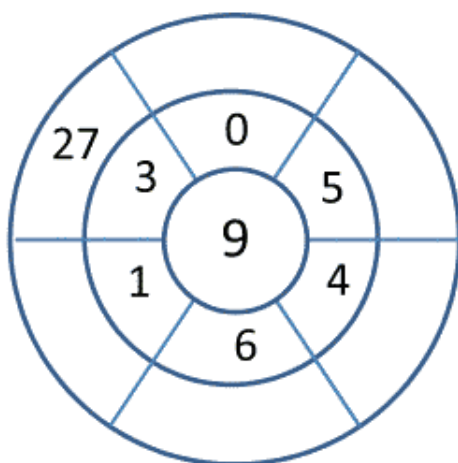
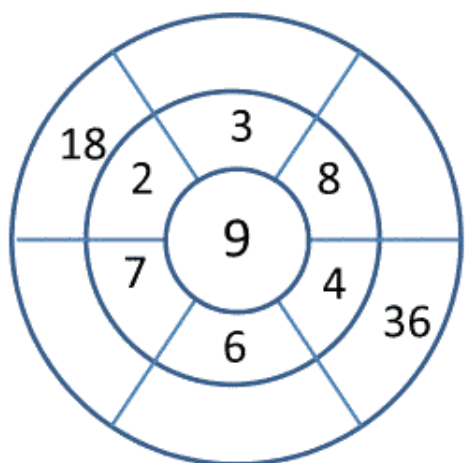
ηροσιδία του 7 -> 7, 14, 20, 21, 28, 35, 41, 42, 47, 49, 53, 56, 62, 63, 70

ηροσιδία του 8 -> 8, 16, 21, 24, 30, 32, 40, 46, 48, 56, 57, 64, 72, 74, 80

ηροσιδία του 9 -> 9, 17, 18, 27, 34, 36, 45, 52, 54, 58, 63, 72, 80, 81, 90



ΣΥΜΠΛΗΡΩΝΩ



ΑΝΤΙΣΤΟΙΧΙΖΩ

